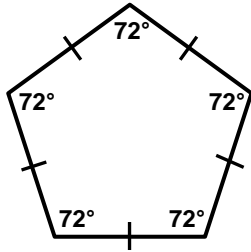


Name:

Basics of Polygons

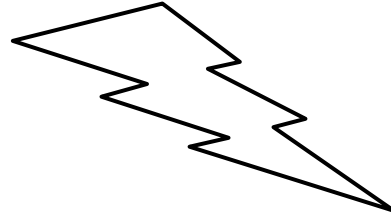
Name each polygon by the number of sides it has and label if the polygons are concave/convex and regular/irregular.

1.



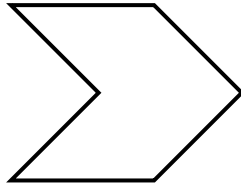
Name of polygon:
Convex or concave?
Regular or irregular?

2.



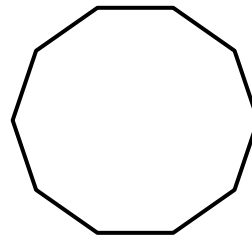
Name of polygon:
Convex or concave?
Regular or irregular?

3.



Name of polygon:
Convex or concave?
Regular or irregular?

4.



This polygon is equilateral and equiangular.


Name of polygon:
Convex or concave?
Regular or irregular?

5.



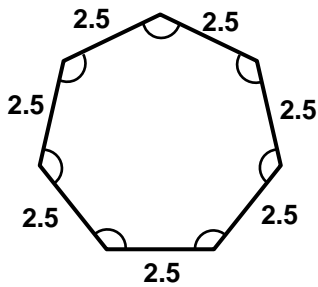
Name of polygon:
Convex or concave?
Regular or irregular?

6.




Name of polygon:
Convex or concave?
Regular or irregular?

7.



Name of polygon:
Convex or concave?
Regular or irregular?

8.



Name of polygon:
Convex or concave?
Regular or irregular?